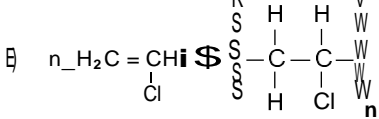
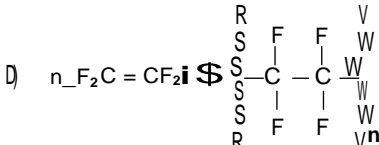
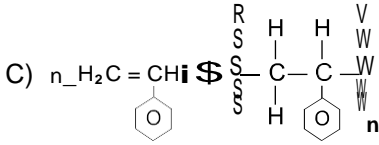
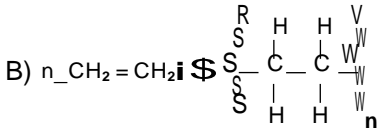
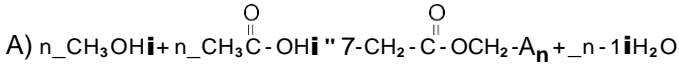




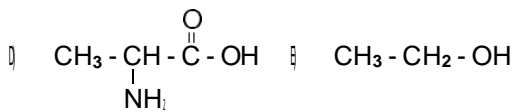
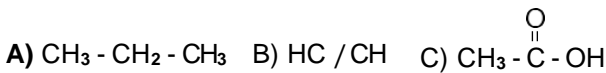
7 Aşağıda verilen bilgilerden hangisi **yanlıştır**

- A) Hidroliz tepkimelerinde su kullanılır.  
B) Teflon bir polimerdir.  
C) Alkanlar katılma polimerleşmesi yapabilir.  
D) Alkenler birbirine katılarak polimerleşirler.  
E) Proteinler aminoasitlerin peptit bağlarıyla bağlanmasıyla oluşurlar.

8 Aşağıda verilen tepkimelerden hangisi **kondenzasyon polimerleşmesidir?**

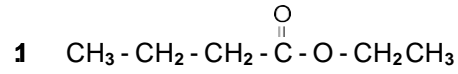


9. Aşağıdaki maddelerden hangisi **katılma polimerleşmesi** yapar?

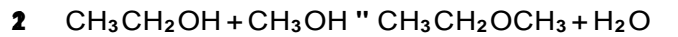
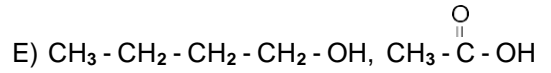
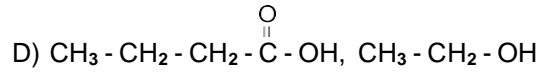
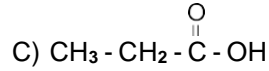
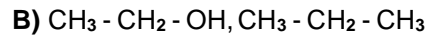
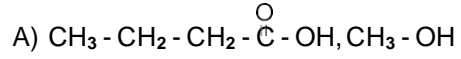


10 Aşağıdakilerden hangisi **yanlıştır**

- A) Monomer + monomer = Dimer  
B) Monomer + dimer = Trimer  
C) Dimer + trimer = Tetramer  
D) (n) Monomer Polimer  
E) (n) Stiren Polistiren



**molekülünün hidrolizi sonucu oluşan ürünler aşağıdakilerden hangisinde doğru verilmiştir?**



tepkimesiyle ilgili olarak;

- I. Kondenzasyon tepkimesidir.  
II. Polimerleşme gerçekleşir.  
III. Hidroliz tepkimesidir.

**yargılarından hangileri doğrudur?**

