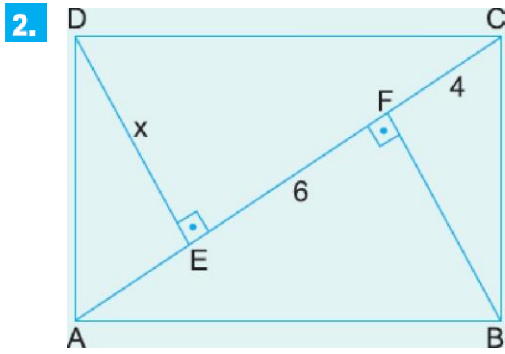


ABCD bir dikdörtgen
 $[DE] \perp [AC]$
 $|AE| = 3 \text{ cm}$
 $|EC| = 12 \text{ cm}$

Yukarıdaki verilere göre, $A(ABCD)$ kaç cm^2 ' dir?

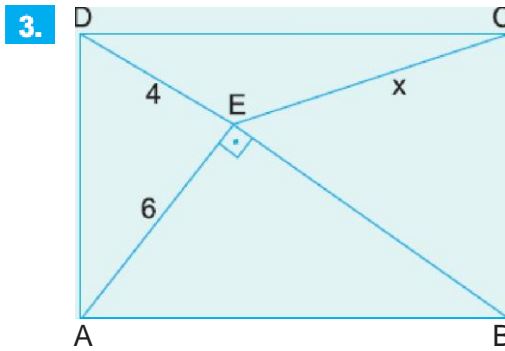
- A) 60 B) 75 C) 90 D) 105 E) 120



ABCD bir dikdörtgen
 $[DE] \perp [AC]$
 $[BF] \perp [AC]$
 $|EF| = 6 \text{ cm}$
 $|FC| = 4 \text{ cm}$

Yukarıdaki verilere göre, $|DE| = x$ kaç cm dir?

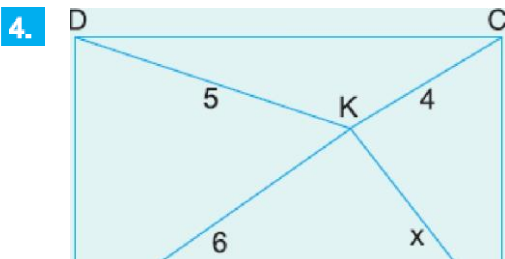
- A) 2 6 B) 4 2 C) 6 D) 2 E) 3 5




ABCD bir dikdörtgen
 $[AE] \perp [BD]$
 $|DE| = 4 \text{ cm}$
 $|AE| = 6 \text{ cm}$

Yukarıdaki verilere göre, $|EC| = x$ kaç cm dir?

- A) 2 B) 2 C) D) 2 E)



ABCD bir dikdörtgen
 $|AK| = 6 \text{ cm}$
 $|DK| = 5 \text{ cm}$
 $|KC| = 4 \text{ cm}$



Yukarıdaki verilere göre, $|BK| = x$ kaç cm dir?

- A) $4\sqrt{2}$ B) $3\sqrt{3}$ C) 5 D) $2\sqrt{6}$ E) $2\sqrt{5}$

www.derskitabicevaplarim.com

Cevaplar :

1)C, 2)D, 3)E, 4)B,